

**Quiz #2 (2.8 - 2.13) Review**

## Algebra 1

2.8: Which Variable to Solve for (Part 1)

- Given an equation, I can solve for a particular variable (like height, time, or length) when the equation would be more useful in that form.
- I know the meaning of the phrase "to solve for a variable."

2.9: Which Variable to Solve for? (Part 2)

- I can write an equation to describe a situation that involves multiple quantities whose values are not known, and then solve the equation for a particular variable.

(DM: Single Step Literal Equations)

(DM: Standard to slope intercept form)

①  $B + c = g$       Solve for  $B$

②  $3x - 4y = 6$       Solve for  $y$

③  $3.6w + 2.8s = 10.8$       Solve for  $w$

## 2.10: Connecting Equations to Graphs (Part 1)

- I can describe the connections between an equation of the form, the features of its graph, and the rate of change in the situation.
- I can graph a linear equation of the form  $y = mx + b$ .

## 2.11: Connecting Equations to Graphs (Part 2)

- I can find the slope and vertical intercept of a line with equation  $ax + by = c$ .
- I can take an equation of the form  $ax + by = c$  and rearrange it into the equivalent form  $y = mx + b$ .
- I can use a variety of strategies to find the slope and vertical intercept of the graph of a linear equation given in different forms.

(DM: x and y intercepts)

(DM: graphing  $Ax + By = C$  from intercepts)

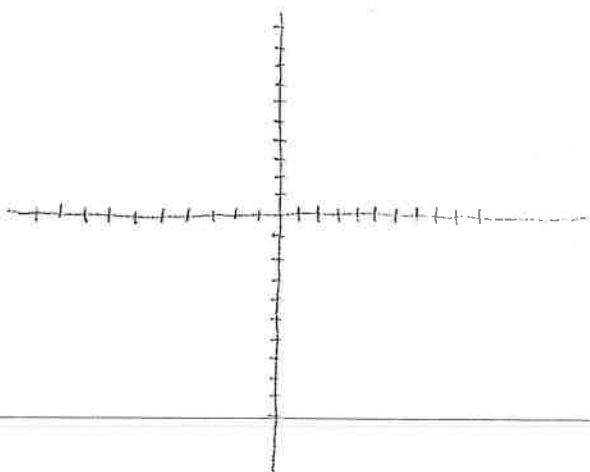
(DM: find the slope graphically)

(DM: graphing lines from equations)

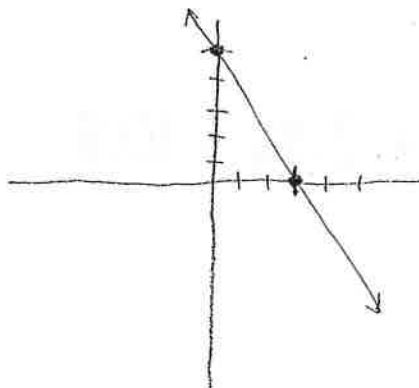
④ Find the x + y intercepts  
for  $-5x + 2y = 10$

⑤ Find the slope and the y-intercept  
for  $5x - 4y = 20$

⑥ Graph  $y = -\frac{3}{5}x + 2$



⑦ Find the slope of the line

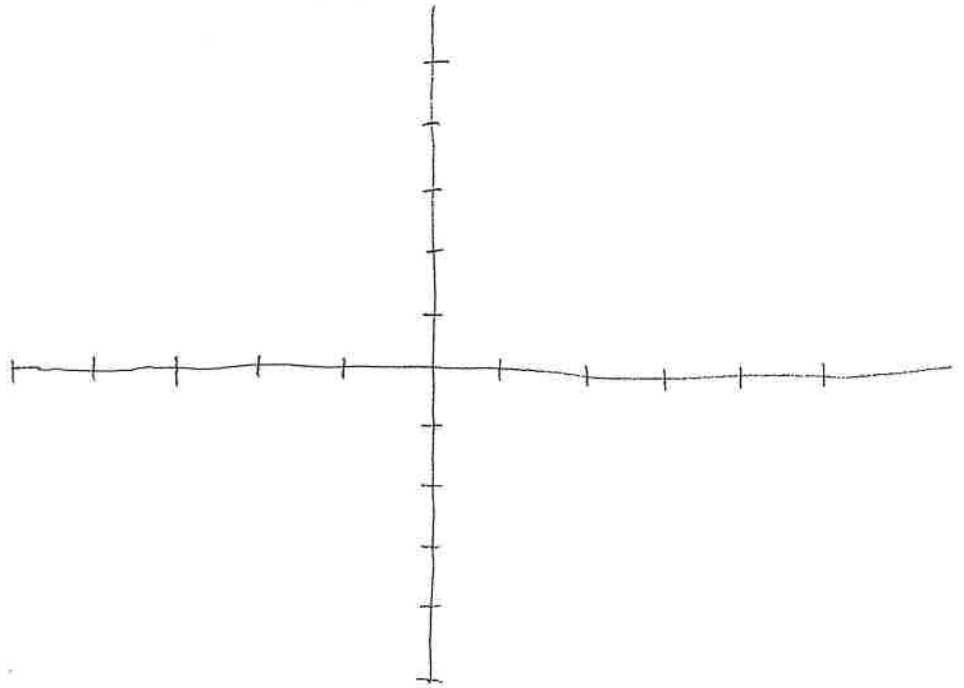


## 2.12: Writing and Graphing Systems of Linear Equations

- I can explain what we mean by "the solution to a system of linear equations" and can explain how the solution is represented graphically.
  - I can explain what we mean when we refer to two equations as a system of equations.
  - I can use tables and graphs to solve systems of equations.
- (DM: solve linear systems graphically)

⑧ Solve using graphing: (manually, or with calculator).

$$\begin{array}{l} y = -x + 2 \\ y = 2x - 4 \end{array}$$



### 2.13: Solving Systems by Substitution

- I can solve systems of equations by substituting a variable or an expression.
- I know more than one way to perform substitution and can decide which way or what to substitute based on how the given equations are written.

(DM: substitution)

Solve the following systems using substitution:

⑨

$$\begin{cases} y = 8x \\ y = 4x + 8 \end{cases}$$

⑩

$$\begin{cases} -6y = x \\ x + y = -30 \end{cases}$$

⑪

$$\begin{cases} x = -1y - 5 \\ -3x + 7y = -45 \end{cases}$$